

Area & Perimeter


Pig Pens

Jana wants to build pens for her pigs. Each pig needs a different sized pen. Compute the area and perimeter for each pen to help her determine how much pen space she needs for her pigs.




H: 9 ft W: 6 ft

Area:
Perimeter:




H: 9 ft W: 8 ft

Area:
Perimeter:



H: 7 ft W: 4 ft

Area:
Perimeter:




H: 8 ft W: 8ft

Area:
Perimeter:



H: 2 ft W: 4ft

Area:
Perimeter:



H: 12 ft W: 12ft

Area:
Perimeter: